

Homework Week 25 (Mar 31 - Apr 5)

Week 25	WEDNESDAY	FRIDAY	MONDAY
Number of the Day	<input type="checkbox"/> 22 or 522	NO SCHOOL - GOOD FRIDAY	NO SCHOOL - EASTER MONDAY
Word of the Day	<input type="checkbox"/> adjective		
Daily Math	---		
Daily Language	---		
ELA Task	<input type="checkbox"/> Writing - what was your favourite part about spring break and why?		
Math Tasks	<input type="checkbox"/> Worksheet - 2D shapes (2) <input type="checkbox"/> Mathletics - Identifying & naming 2D shapes		
Social Studies	---		
Spelling	<input type="checkbox"/> New spelling words (cut & sort words)		
Reading	<input type="checkbox"/> 20+ minutes		

Wk 25 - Wednesday NUMBER OF THE DAY

NAME: _____

NUMBER: 22 or 522

PLACE VALUE:

100s	10s	1s

EVEN (2, 4, 6, 8, 0) or ODD (1, 3, 5, 7, 9)

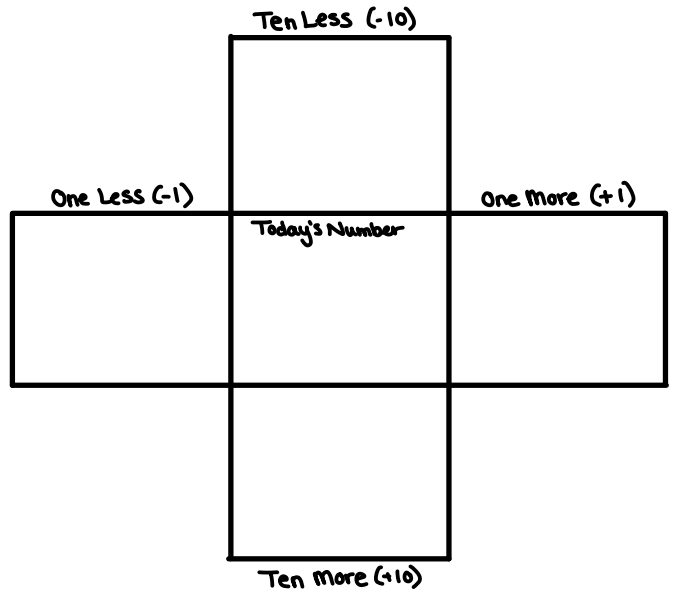
DRAW IT: $\square = 100$ $\parallel = 10$ $\cdot = 1$

EXPANDED FORM:

 + +

ADDITION:

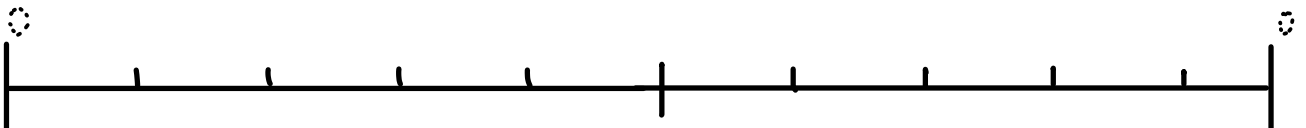
 + =



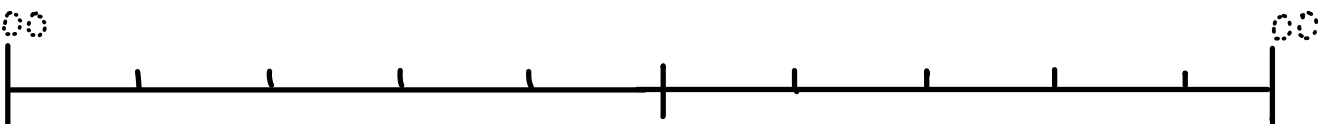
SUBTRACTION:

 - =

ROUNDING TO THE NEAREST TEN (10):



ROUNDING TO THE NEAREST HUNDRED (100):



WORD OF THE DAY

1. Spell it: adjective

2. Define it: _____

3. Vowels:

4. Consonants:

5. Syllables:

6. Sounds like / Rhymes with: _____

7. Use it in a sentence:


8. Do you know it in a different language?

2-D Shapes (2)

- Identify and describe regular shapes.
- Build different things using tangrams.
- Describe the locations and the movements of objects.



We're two steps apart.

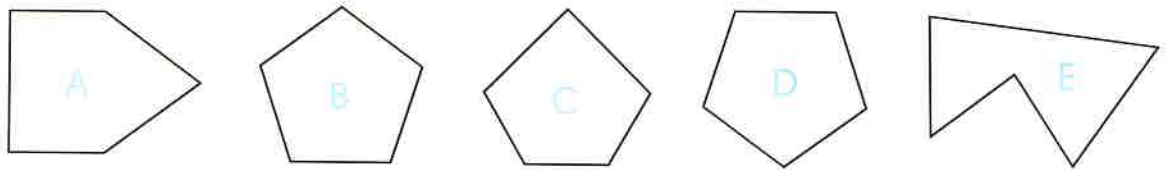


Read what Simon says. Then help him colour the correct shapes.

A regular shape has all sides equal.



- ① a regular pentagon



- ② a regular hexagon




- ③ a regular octagon



Date: _____

Name: _____



Four sets of primary-ruled lines for handwriting practice. Each set consists of a solid top line, a dashed midline, and a solid bottom line.

