

MONDAY

Patterning and Algebra

1. Count by 10s on the chart.
Colour the numbers.

What patterns do you see?

2. What is the missing number
in the sequence?

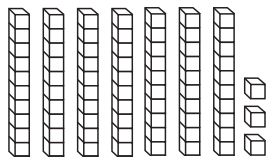
40, 50, 60, _____, 80, 90

1	2	3	4	5	6	7	8	9	10
11	12	13	14	15	16	17	18	19	20
21	22	23	24	25	26	27	28	29	30
31	32	33	34	35	36	37	38	39	40
41	42	43	44	45	46	47	48	49	50
51	52	53	54	55	56	57	58	59	60
61	62	63	64	65	66	67	68	69	70
71	72	73	74	75	76	77	78	79	80
81	82	83	84	85	86	87	88	89	90
91	92	93	94	95	96	97	98	99	100

TUESDAY

Number Sense and Operations

1. What is the number?



tens _____

ones _____

number _____

2. Write the number.

A. 10 more than 8 _____

B. 5 less than 21 _____

3. A. $57 =$ _____ tens
_____ ones

B. $82 =$ _____ tens
_____ ones

4. What is the name of this coin?



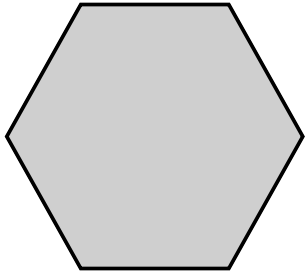
A. quarter _____

B. toonie _____

C. nickel _____

WEDNESDAY

Geometry



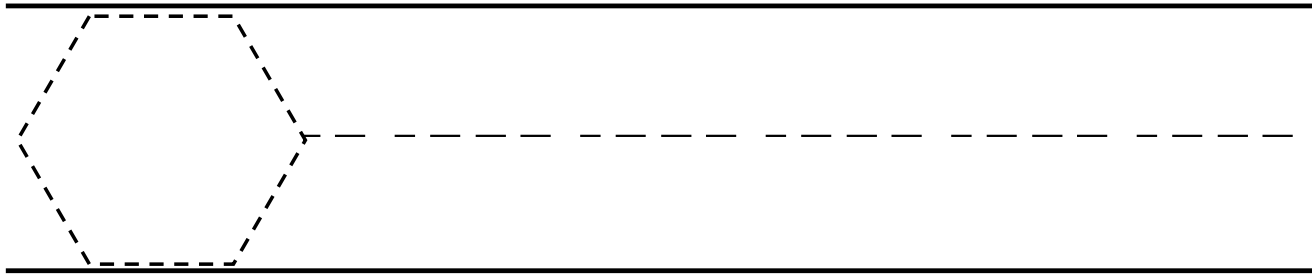
1. Circle the name of this shape.

rectangle hexagon

2. How many sides does it have? _____

3. How many vertices does it have? _____

Trace and draw the shape.



THURSDAY

Measurement

1. Which tool would be best to measure the weight of a bag of apples?

- A. scale
- B. ruler
- C. measuring cup

2. What is the better estimate of the length of a car?



- A. more than 1 metre
- B. less than 1 metre

3. Is the temperature hot or cold?



- A. hot
- B. cold


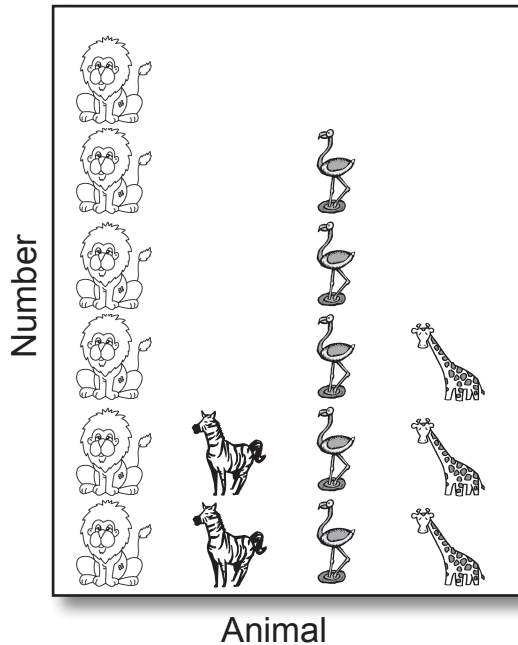
4. Measure the length of the line.



It is about _____  long.

Here are the results of a Favourite Zoo Animal Survey.
Use the data from the pictograph to make a bar graph. Answer the questions.

Favourite Zoo Animal



1. How many people answered the survey? _____
2. What was the most popular zoo animal? _____
3. What was the least popular zoo animal? _____
4. How many voted for either a lion or zebra? _____

BRAIN STRETCH



George had 15 stamps. Carlos had 22 stamps.
How many more stamps did Carlos have?

